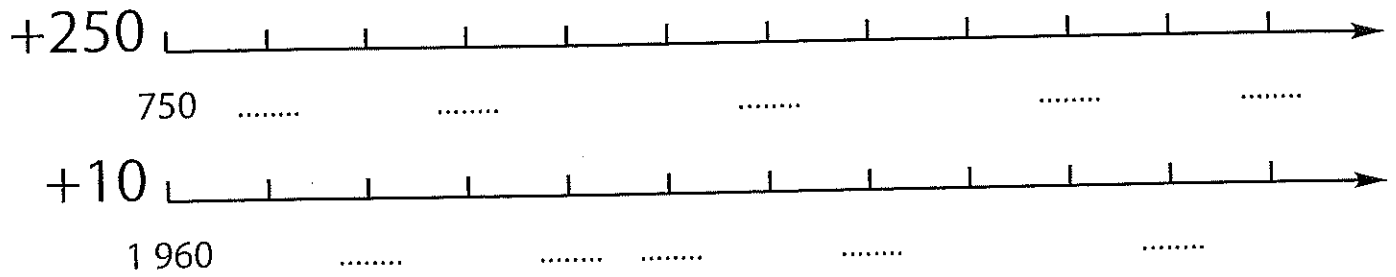


L4

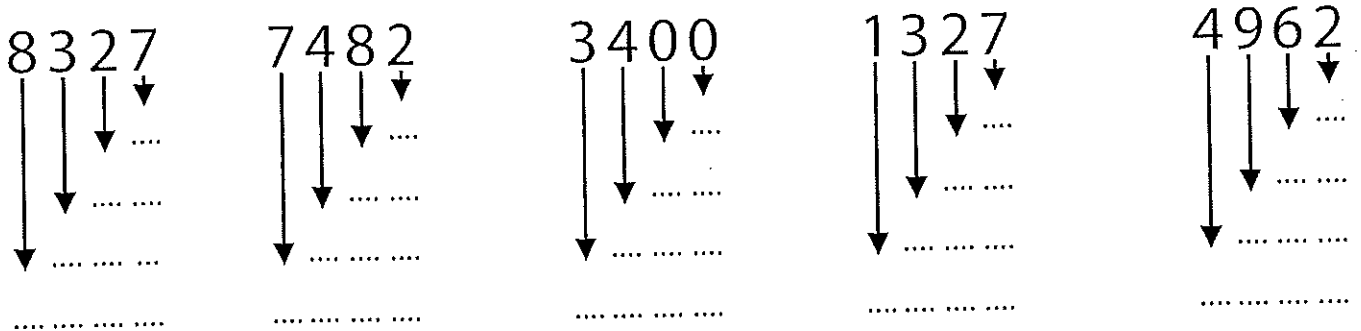
GROTE GETALLEN

(TOT 100 000)

1 Vul de lijn verder aan.



2 Schrijf de waarde van het getal op.



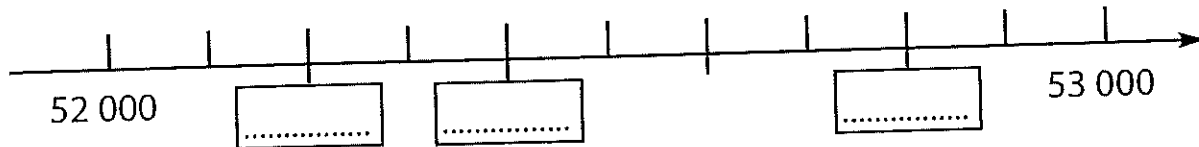
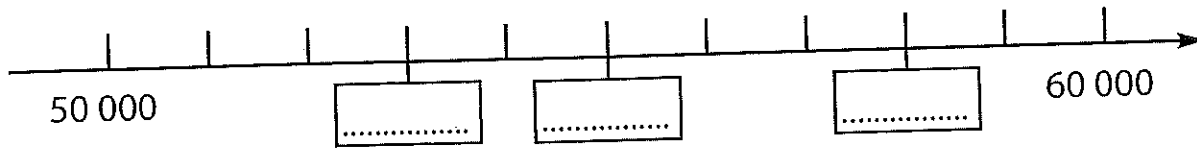
3 Trek het getal er telkens af!

- 1 000	8 000					
- 100	7 300					
- 10	8 240					
- 1	6 000					

Wat is de waarde van het onderstreepte getal?

3499 2768 9349 7608 2043
 400 = H = H = = =


1. Schrijf het juiste getal op.



2. Tel het getal er telkens bij!

- + 1
- + 10
- + 100
- + 1 000

23 796						
		49 293				
			83 721			
76 200						



$100\ 000 + 2\ 000 = \dots\dots\dots$

$10\ 000 + 5 = \dots\dots\dots$

$300\ 000 + 40\ 000 = \dots\dots\dots$

$10\ 000 - 5 = \dots\dots\dots$

$10\ 000 + 100 = \dots\dots\dots$

$100\ 000 - 50 = \dots\dots\dots$

$100\ 000 + 10 = \dots\dots\dots$

$100\ 000 + 500 = \dots\dots\dots$

$100\ 000 + 1 = \dots\dots\dots$

$10\ 000 - 50 = \dots\dots\dots$

$10\ 000 - 10 = \dots\dots\dots$

$87\ 000 - 29\ 000 = \dots\dots\dots$

$100\ 000 - 100 = \dots\dots\dots$

$85\ 000 - 17\ 000 = \dots\dots\dots$

$10\ 000 + 200 = \dots\dots\dots$

$93\ 000 - 85\ 000 = \dots\dots\dots$

$100\ 000 - 2\ 000 = \dots\dots\dots$

$45\ 000 + 93\ 000 = \dots\dots\dots$

$10\ 000 - 9 = \dots\dots\dots$

$76\ 000 + 34\ 000 = \dots\dots\dots$

9 minder dan		7 meer dan		20 minder dan		de helft van	
100 000	200 000	30 000	86 000
30 000	40 000	4 300	106 000
16 000	19 820	90 000	640
800	7 000	100 000	3 280
4 200	994	9 800	4 300

